











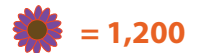
# Flower Nursery: Reading a Pictograph

These two pictographs are comparing two types of flowers imported from Europe. Answer the questions below using information from the pictographs.

Note: each tulip in the pictograph stands for 1,000 tulips. Each daisy in the pictograph stands for 1,200 daisies.

Country	Number of Tulips Imported
Holland	
France	
Denmark	
Italy	

Country	Number of Daisies Imported
Holland	
France	
Denmark	
Italy	



## Questions:

1. How many tulips did Holland and France import?

Answer: \_\_\_\_\_

2. How many daisies did Holland and Italy import?

Answer: \_\_\_\_\_

3. What country imported the same amount of tulips and daisies?

Answer: \_\_\_\_\_

4. Write the countries that imported the most flowers to the least flowers, in order.

Answer: \_\_\_\_\_

5. If Denmark wants to import 3,000 more daisies, how many  would you draw in the table above?

Answer: \_\_\_\_\_